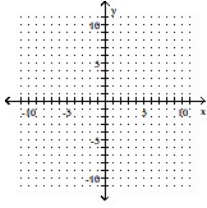


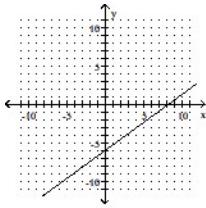
**MULTIPLE CHOICE.** Choose the one alternative that best completes the statement or answers the question.

**Graph the equation.**

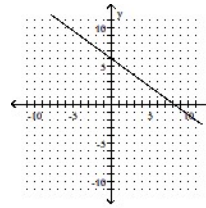
1)  $y = \frac{8}{11}x + 6$



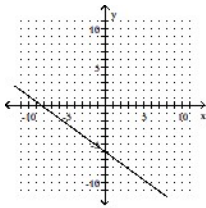
A)



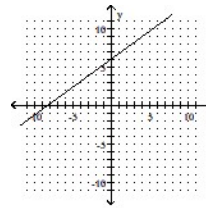
B)



C)

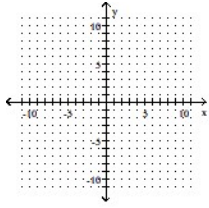


D)

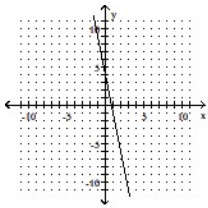


Answer: D

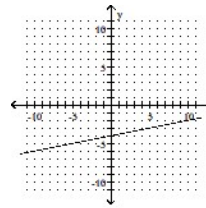
2)  $3y + 15x = 12$



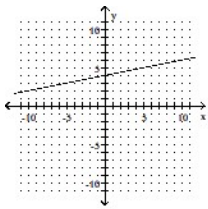
A)



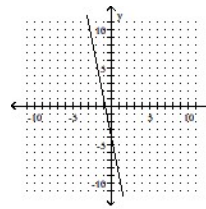
B)



C)

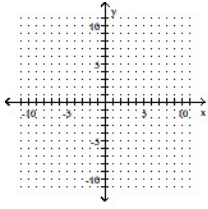


D)

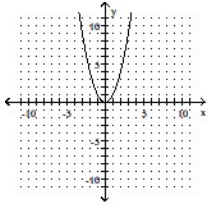


Answer: A

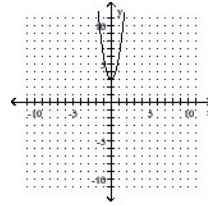
3)  $y = 3x^2$



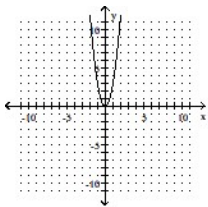
A)



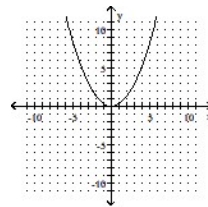
B)



C)

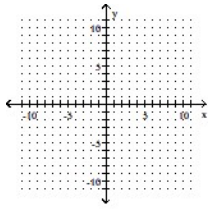


D)

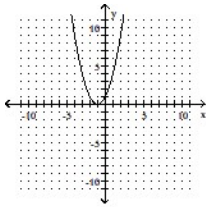


Answer: C

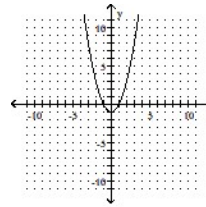
4)  $y = x^2 - 1$



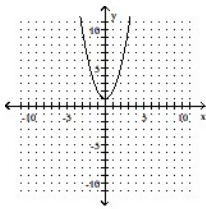
A)



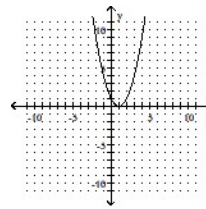
B)



C)

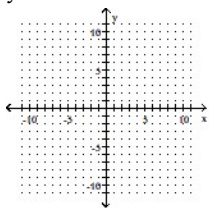


D)

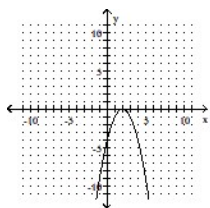


Answer: B

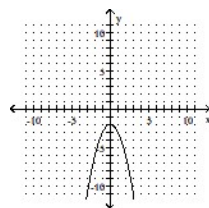
5)  $y = -x^2 - 2$



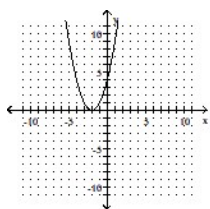
A)



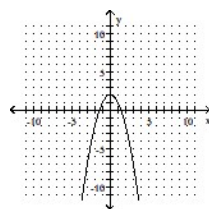
B)



C)



D)



Answer: B